


ADDITION TO 18 SKELTON PUZZLES

SKELTON PUZZLES

1. Choose an addition sentence
2. Solve (use counters if needed)
3. Find the correct answer to complete the puzzle
4. Write the answer on the recording sheet



ADDITION TO 12 SKELTON PUZZLES



Name Molly


Directions: Write the addition sentence with the answer from each skeleton puzzle in the correct boxes below.

A	B	C	D
E	F	G	H
I	J	K	L
M	N	O	P

A hand is placing a puzzle piece into box D. The puzzle piece features a cartoon skeleton holding a red pumpkin and the equation $9 + 2 =$. Another puzzle piece with the answer 11 is being placed into box H. Box D already contains the equation $9 + 2 = 11$.

COUNTING TO 100

WHAT IS IT?



MISSING ADDENDS

DICE AND DOTS

A

$$\begin{array}{|c|} \hline \bullet \bullet \bullet \bullet \\ \hline \end{array} + \begin{array}{|c|} \hline \\ \hline \end{array} = 9$$

B

$$\begin{array}{|c|} \hline \bullet \bullet \bullet \\ \hline \end{array} + \begin{array}{|c|} \hline \\ \hline \end{array} = 7$$

C

$$\begin{array}{|c|} \hline \bullet \bullet \bullet \\ \hline \end{array} + \begin{array}{|c|} \hline \\ \hline \end{array} = 9$$

D

$$\begin{array}{|c|} \hline \bullet \bullet \\ \hline \end{array} + \begin{array}{|c|} \hline \\ \hline \end{array} = 4$$

E

$$\begin{array}{|c|} \hline \bullet \\ \hline \end{array} + \begin{array}{|c|} \hline \\ \hline \end{array} = 8$$

F

$$\begin{array}{|c|} \hline \bullet \\ \hline \end{array} + \begin{array}{|c|} \hline \\ \hline \end{array} = 5$$

G

$$\begin{array}{|c|} \hline \bullet \bullet \bullet \bullet \\ \hline \end{array} + \begin{array}{|c|} \hline \\ \hline \end{array} = 8$$

H

$$\begin{array}{|c|} \hline \bullet \bullet \bullet \bullet \\ \hline \end{array} + \begin{array}{|c|} \hline \\ \hline \end{array} = 6$$

NUMBER ORDER

LINE 'EM UP

2. Put them in order from least to greatest
3. Write the 4 numbers in order on the recording sheet



NAME _____

NUMBER ORDER
LINE 'EM UP
Directions: Write the complete number in the box below.


16

7 9 11

LEAST → GREAT

PLACE VALUE

BASE TEN BLOCKS MATCH



ADDITION STORY PROBLEMS

OCTOBER MATH

ADDITION STORY PROBLEMS Name _____

OCTOBER MATH

Directions: Write the addition problem with answer in the correct box below.

A	B	C	D
E			
I			

G

There are 7 🍬 in the blue jar and 4 🍬 in the red jar. How many 🍬 in all?


Lucky Little Learners

NUMBER SENSE REKENREKS ADDITION

NUMBER SENSE

REKENREKS ADDITION


1. Choose a rekenreks card
2. Determine the total sum on the card
3. Find the matching sum card
4. Write the addition problem with answer on the recording sheet




12



8




3



6



5




SKIP COUNTING BY 10'S

SPOOKY NUMBERS

SKIP COUNTING BY 10'S
SPOOKY NUMBERS

1. Choose a number strip
2. Count by 10's
3. Find the missing number and place it in the correct spot
4. Write the answers on the recording sheet



30

40 50 60 70

10 20 30 40

50 60 70 80

10 20 30 40

40 50 60 70 80

10 20 30 40

40 50 60 70 80

NUMBER BONDS

PUMPKIN NUMBERS



SUBTRACTION WITHIN 12

MUMMY PUZZLES

3. Find the correct answer to complete the puzzle
4. Write the answer on the recording sheet

